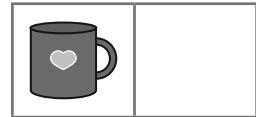
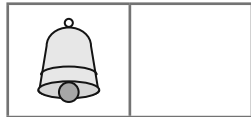
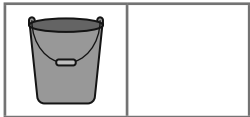
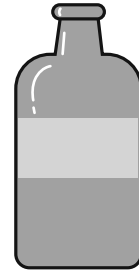
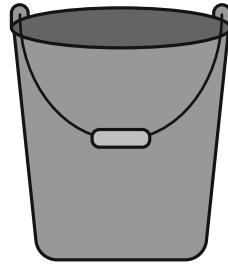
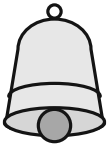
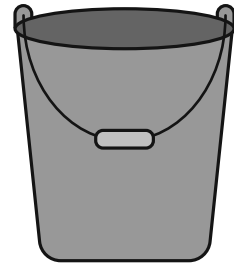

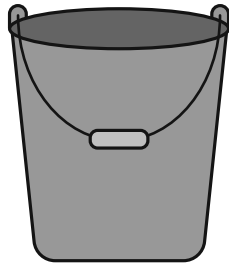
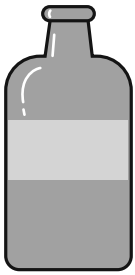


Напиши у клітинці біля зображення відповідну цифру.



Обчисли приклади.

$$\text{leaf} + \text{leaf} = \square$$

$$1 + 1 = \square$$

$$\text{strawberry} + \text{strawberry} = \square$$

$$2 + 1 = \square$$

$$\text{beach ball} + \text{beach ball} - \text{beach ball} = \square$$

$$2 - 1 = \square$$

$$\text{apple} + \text{apple} + \text{apple} = \square$$

$$1 + 2 = \square$$

$$\text{mug} + \text{mug} + \text{mug} - \text{mug} = \square$$

$$3 - 1 = \square$$

$$\text{bell} + \text{bell} + \text{bell} - \text{bell} - \text{bell} = \square$$

$$3 - 2 = \square$$